

# WORKSHEET

Name: \_\_\_\_\_


Standard: \_\_\_\_\_ Age: \_\_\_\_\_

Date: \_\_\_\_\_




Write the fraction of the set that is shaded:

1)




\_\_\_\_\_

2)




\_\_\_\_\_

3)




\_\_\_\_\_

4)




\_\_\_\_\_

5)




\_\_\_\_\_

6)




\_\_\_\_\_

7)




\_\_\_\_\_

8)



\_\_\_\_\_

9)



\_\_\_\_\_

# WORKSHEET

Name: \_\_\_\_\_


Standard: \_\_\_\_\_ Age: \_\_\_\_\_

Date: \_\_\_\_\_




Write the fraction of the set that is shaded:


1)




2)




3)




4)




5)




6)




7)



8)



9)



# WORKSHEET

Name: \_\_\_\_\_

Standard: \_\_\_\_\_ Age: \_\_\_\_\_

Date: \_\_\_\_\_



## ANSWER KEY

1)  $\frac{1}{3}$

2)  $\frac{2}{3}$

3)  $\frac{1}{3}$

4)  $\frac{1}{5}$

5)  $\frac{5}{7}$

6)  $\frac{1}{9}$

7)  $\frac{3}{4}$

8)  $\frac{2}{7}$

9)  $\frac{4}{9}$

## WORKSHEET

Name: \_\_\_\_\_

Standard: \_\_\_\_\_ Age: \_\_\_\_\_

Date: \_\_\_\_\_



## ANSWER KEY

1)  $\frac{4}{5}$

2)  $\frac{4}{9}$

3)  $\frac{5}{6}$

4)  $\frac{2}{5}$

5)  $\frac{1}{4}$

6)  $\frac{2}{9}$

7)  $\frac{2}{3}$

8)  $\frac{3}{10}$

9)  $\frac{2}{4}$