

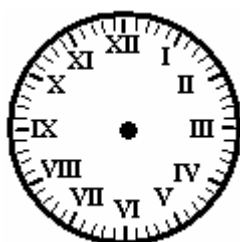
TELLING TIME



Name: _____ Date: ____/____/____ Score _____

WORKSHEET-11

Directions: Draw the Hour and the Minute hand on each clock to match the time given.



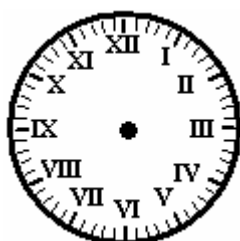
1) 4:00



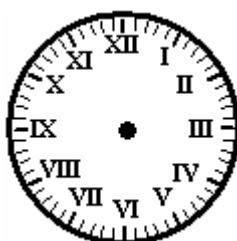
2) 3:00



3) 6:30



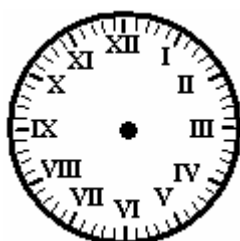
4) 12:30



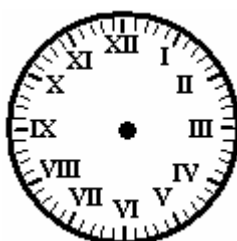
5) 1:00



6) 11:00




7) 5:30



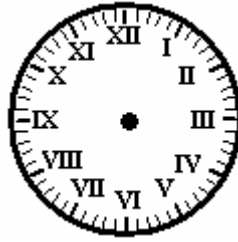
8) 8:30




9) 3:30




10) 5:00



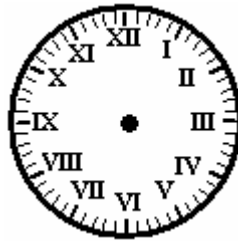
11) 8:00



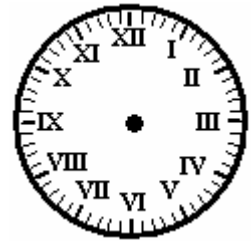
12) 11:30



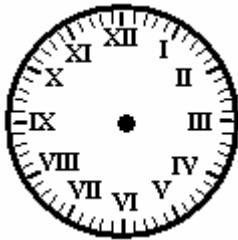
13) 2:30



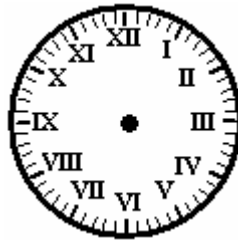
14) 7:30




15) 1:30



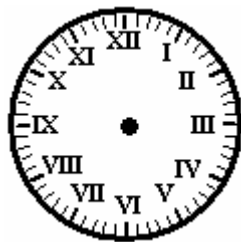
16) 2:00



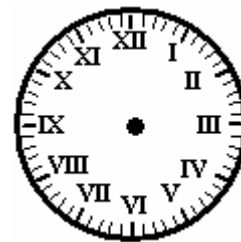
17) 10:00



18) 12:00



19) 4:30



20) 9:00


TELLING TIME




Name: _____ Date: ____/____/____ Score _____

WORKSHEET-12

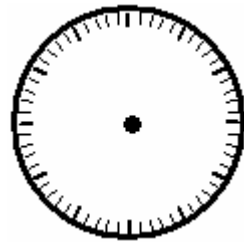
Directions: Draw the Hour and the Minute hand on each clock to match the time given.




1) 6:00



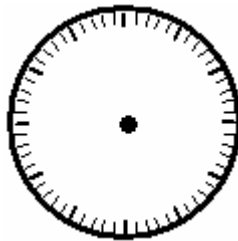
2) 1:30



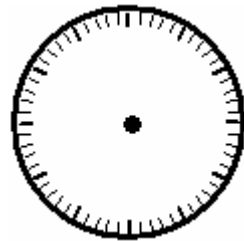
3) 10:00




4) 11:30



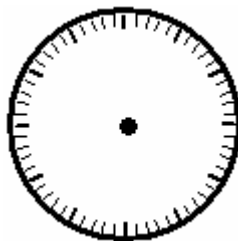
5) 5:00



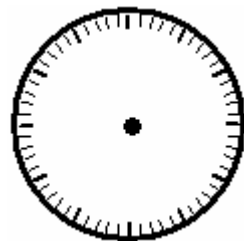
6) 2:00




7) 1:00



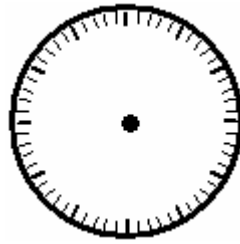
8) 9:00



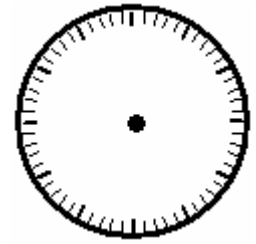
9) 2:30




10) 8:00



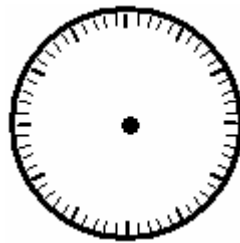
11) 3:30



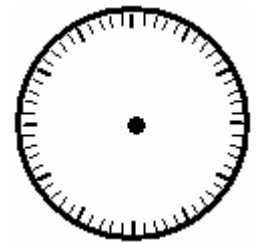
12) 8:30




13) 12:30



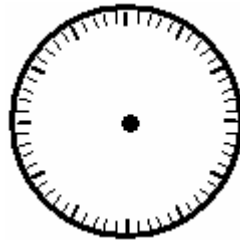
14) 7:30



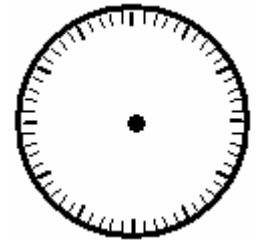
15) 6:30



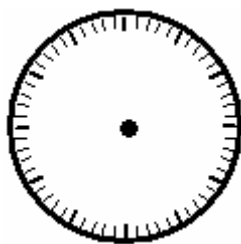
16) 11:00



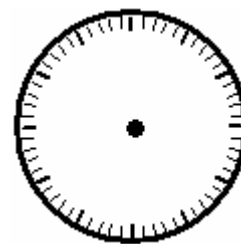
17) 4:00



18) 9:30



19) 4:30



20) 12:00