

WORKSHEET

Name: _____

Standard: _____ Age: _____

Date: _____



Circle the correct number (The first one is done for you)

(1) How many flowers are there?



1	2	3	4 ✓	5
---	---	---	-----	---

(2) How many strawberries are there?



1	2	3	4	5
---	---	---	---	---

(3) How many tomatoes are there?



1	2	3	4	5
---	---	---	---	---

(4) How many butterflies are there?



1	2	3	4	5
---	---	---	---	---

(5) How many cars are there?



1	2	3	4	5
---	---	---	---	---

(6) How many balls are there?



1	2	3	4	5
---	---	---	---	---

WORKSHEET

Name: _____


Standard: _____ Age: _____

Date: _____




Circle the no. that is equal to the no. of objects in each set.

(7) How many rectangles are there?



1	2	3	4	5
---	---	---	---	---

(8) How many circles are there?



1	2	3	4	5
---	---	---	---	---

(9) How many balls are there?




1	2	3	4	5
---	---	---	---	---

(10) How many cycles are there?



1	2	3	4	5
---	---	---	---	---

(11) How many pineapples are there?



1	2	3	4	5
---	---	---	---	---

(12) How many houses are there?



1	2	3	4	5
---	---	---	---	---