


COLORS AND SHAPES



Name: _____ Date: ___/___/___ Score _____

WORKSHEET-1

Identify this







- Orange triangle
- Yellow triangle
- Yellow Rectangle
- Red triangle



A shape green in colour and has 10 vertices

- A green five-pointed star with a black outline.
- A red five-pointed star with a black outline.
- A solid green equilateral triangle with a black outline.
- A solid blue circle with a black outline.

Which of the following is a **Orange Hexagon**?

- 
- 
- 
- 

A shape that has all 4 sides equal

- Square**
- Hexagon**
- Pentagon**
- Parallelogram**

Planet

How many vertices do a square and a pentagon have together?

- 5**
- 9**
- 1**
- 4**

How many sides and vertices does a hexagon have?

- 6 sides and 6 vertices**
- 6 sides and 5 vertices**
- 5 sides and 5 vertices**
- 5 sides and 6 vertices**

Colour of leaves.



Learners' Planet

- orange**
- green**
- red**
- blue**

Which of the following is a correct statement?

- A pentagon has 6 sides.**
- All sides of the rectangle are equal.**
- Triangle has 3 sides.**
- Square has opposite sides equal.**

Shape of chessboard.



Learners' Planet

- Rectangle**
- Square**
- Hexagon**
- Circle**



