

Fractions-Worksheet-4

Name: _____

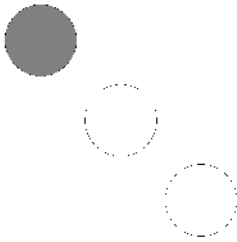
Standard: _____ Age: _____

Date: _____

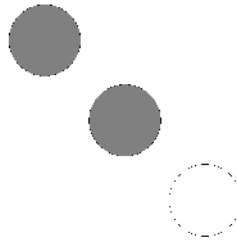


Write the fraction of the set that is shaded:

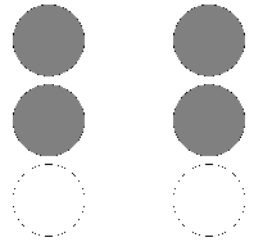
1)




2)




3)




4)



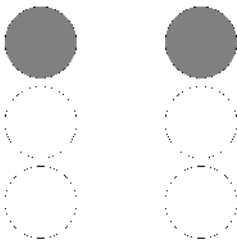
5)



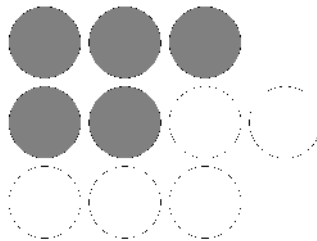
6)




7)



8)



9)



Fractions-Worksheet-5

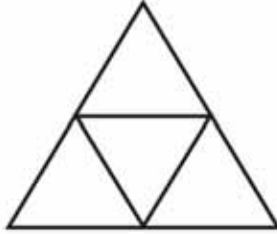
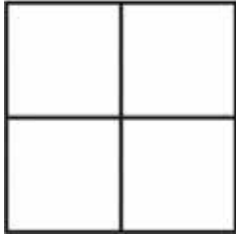
Name: _____

Standard: _____ Age: _____

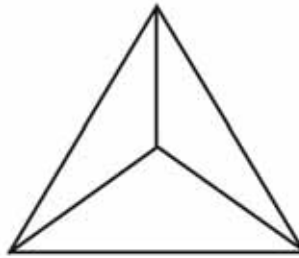
Date: _____



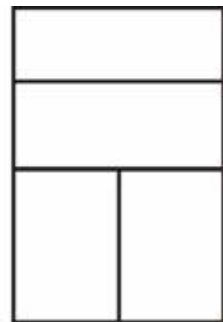
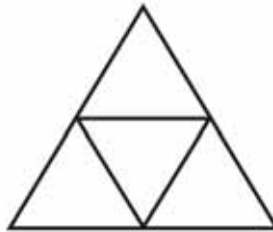
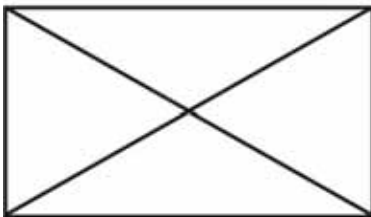
(1) Colour one fourth ($1/4$) of each shape.



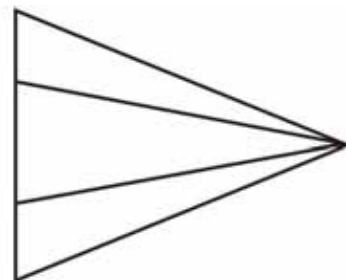

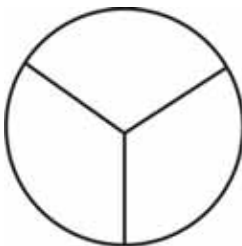
(2) Colour one third ($1/3$) of each shape.



(3) Colour three fourth ($3/4$) of each shape.



(4) Colour two third ($2/3$) of each shape.



Fractions-Worksheet-6

Name: _____

Standard: _____

Age: _____

Date: _____



WRITE THE FRACTIONS FOR THE SHADED PORTION

