

Geometry-Shape-Worksheet-1

Name: _____

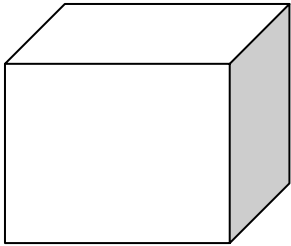
Standard: _____

Age: _____

Date: _____



SHAPES




Name: _____

Number of faces: _____

Number of edges: _____

Number of Vertices: _____

Example: _____



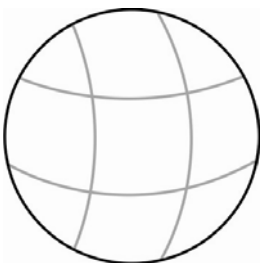
Name: _____

Number of faces: _____

Number of edges: _____

Number of Vertices: _____

Example: _____



Name: _____

Number of faces: _____

Number of edges: _____

Number of Vertices: _____

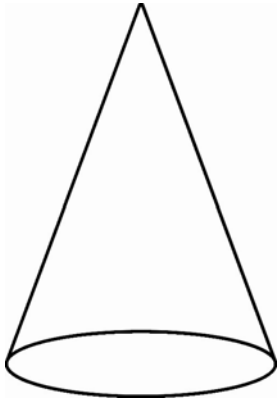
Example: _____

Geometry-Shape-Worksheet-1

Name: _____

Standard: _____ Age: _____

Date: _____



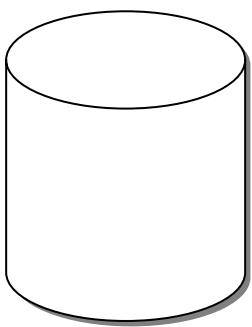
Name: _____

Number of faces: _____

Number of edges: _____

Number of Vertices: _____

Example: _____



Name: _____

Number of faces: _____

Number of edges: _____

Number of Vertices: _____

Example: _____

Geometry-Shape-Worksheet-2

Name: _____

Standard: _____ Age: _____

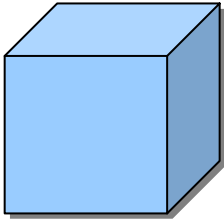
Date: _____




SHAPES

Fill in the blanks using one of the words

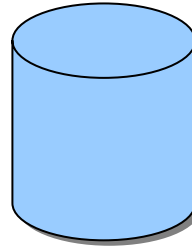
cuboid



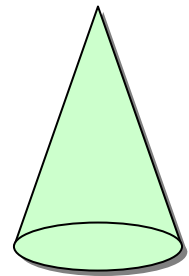
sphere



cylinder



cone



- (1) A ball looks like a _____.
- (2) An eraser looks like a _____.
- (3) A book looks like a _____.
- (4) A chalk looks like a _____.
- (5) A tent looks like a _____.
- (6) A crayon looks like a _____.
- (7) A computer looks like a _____.
- (8) A Birthday cap looks like a _____.
- (9) An ice-cream cone looks like a _____.
- (10) A _____ has 8 corners.
- (11) A _____ has 2 faces.
- (12) A _____ has 2 edges.
- (13) A _____ has no edges and no corners.