

# GEOMETRY-SHAPES IDENTIFICATION

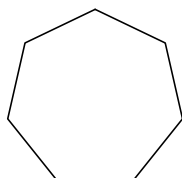


Name: \_\_\_\_\_ Date: \_\_\_\_/\_\_\_\_/\_\_\_\_ Score \_\_\_\_\_

## WORKSHEET-3

Identify each shape by marking the name that best describes it:

1)



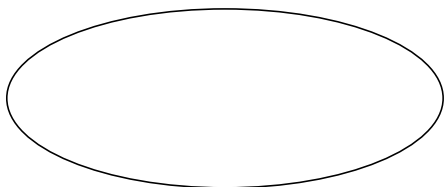
- A. Cylinder
- B. Rectangle
- C. Circle
- D. Septagon

2)



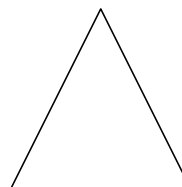
- A. Pyramid
- B. Square
- C. Octagon
- D. Septagon

3)



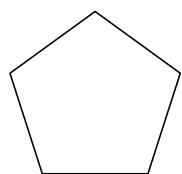
- A. Triangle
- B. Ellipse
- C. Square
- D. Octagon

4)



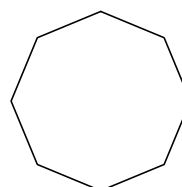
- A. Square
- B. Cube
- C. Cylinder
- D. Triangle

5)



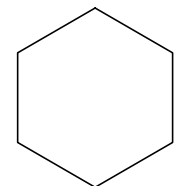
- A. Pentagon
- B. Square
- C. Sphere
- D. Rectangle

6)



- A. Triangle
- B. Octagon
- C. Cube
- D. Septagon

7)



- A. Square
- B. Rectangle
- C. Hexagon
- D. Cylinder

8)



- A. Cube
- B. Octagon
- C. Rectangle
- D. Pyramid

# GEOMETRY-SHAPES IDENTIFICATION

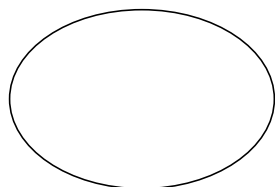


Name: \_\_\_\_\_ Date: \_\_\_\_/\_\_\_\_/\_\_\_\_ Score \_\_\_\_\_

## WORKSHEET-4

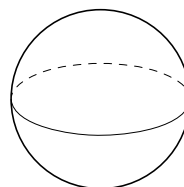
Identify each shape by marking the name that best describes it:

1)



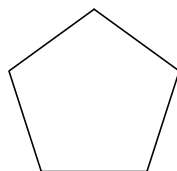
- A. Cube
- B. Cylinder
- C. Pentagon
- D. Ellipse

2)



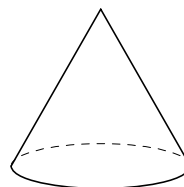
- A. Cube
- B. Sphere
- C. Hexagon
- D. Pentagon

3)



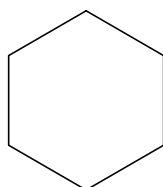
- A. Rectangle
- B. Square
- C. Pentagon
- D. Circle

4)



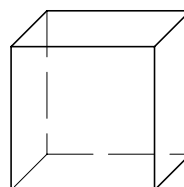
- A. Rectangle
- B. Septagon
- C. Circle
- D. Cone

5)



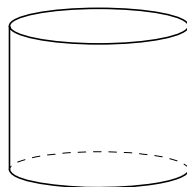
- A. Rectangle
- B. Cylinder
- C. Hexagon
- D. Septagon

6)



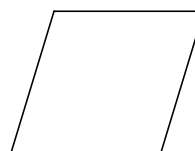
- A. Cone
- B. Square
- C. Cube
- D. Circle

7)



- A. Cylinder
- B. Ellipse
- C. Circle
- D. Hexagon

8)



- A. Septagon
- B. Cylinder
- C. Octagon
- D. Rhombus

## Answer Key Worksheet-3

---

1) d

2) b

3) b

4) d

5) a

6) b

7) c

8) c

## Answer Key Worksheet-4

---

1) d

2) b

3) c

4) d

5) c

6) c

7) a

8) d