

# WORKSHEET

Name: \_\_\_\_\_

Standard: \_\_\_\_\_

Age: \_\_\_\_\_

Date: \_\_\_\_\_



## Telling Time Worksheet

Directions: Draw the Hour and the Minute hand on each clock to match the time given.



1) 4:41



2) 2:33



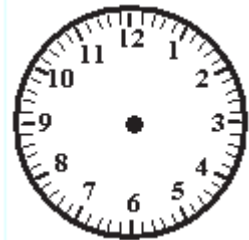
3) 8:09



4) 2:40



5) 4:18



6) 3:28



7) 1:09



8) 11:46



9) 1:06



10) 8:43



11) 6:07



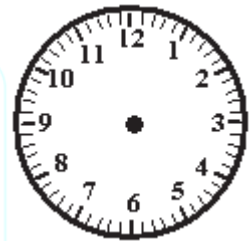
12) 5:25



13) 2:16



14) 9:38




15) 11:07



16) 2:32



17) 12:04



18) 10:33



19) 4:09



20) 10:39

# WORKSHEET

Name: \_\_\_\_\_

Standard: \_\_\_\_\_

Age: \_\_\_\_\_

Date: \_\_\_\_\_



## Telling Time Worksheet

Directions: Draw the Hour and the Minute hand on each clock to match the time given.



1) 12:14



2) 4:47



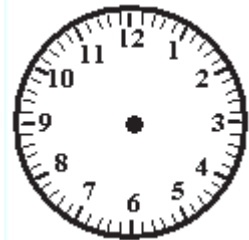
3) 8:28



4) 12:06



5) 9:27



6) 9:07



7) 1:30



8) 6:49



9) 6:15

# WORKSHEET

Name: \_\_\_\_\_

Standard: \_\_\_\_\_ Age: \_\_\_\_\_

Date: \_\_\_\_\_



10) 10:01



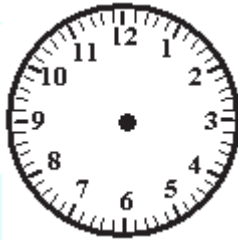
11) 6:30



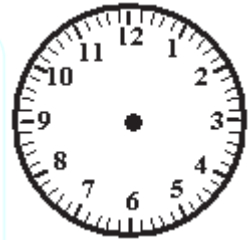
12) 3:55



13) 7:29



14) 11:57



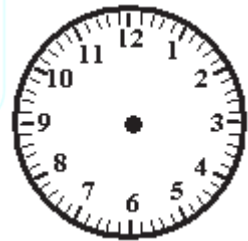
15) 11:32



16) 11:03



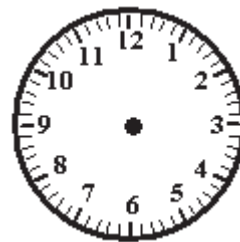
17) 4:17



18) 12:51



19) 4:33



20) 5:45

Name: \_\_\_\_\_

Standard: \_\_\_\_\_

Age: \_\_\_\_\_

Date: \_\_\_\_\_

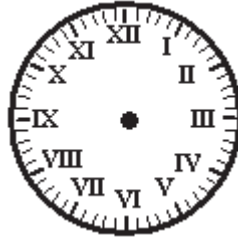


## Telling Time Worksheet


Directions: Draw the Hour and the Minute hand on each clock to match the time given.



1) 6:52



2) 1:49



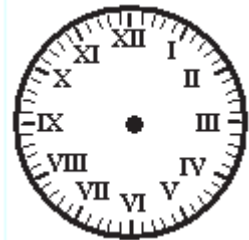
3) 9:37



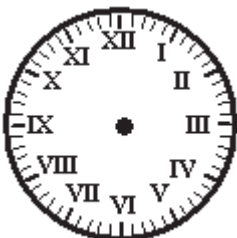
4) 1:56



5) 2:22



6) 5:08



7) 2:37



8) 10:02



9) 2:36

# WORKSHEET

Name: \_\_\_\_\_


Standard: \_\_\_\_\_

Age: \_\_\_\_\_


Date: \_\_\_\_\_



10) 7:04



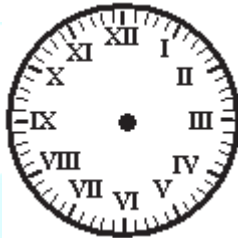
11) 7:39



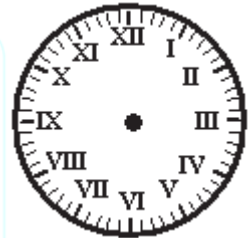
12) 7:10



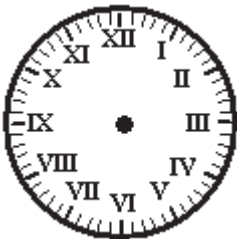
13) 12:24



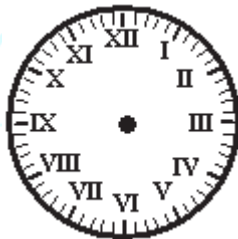
14) 8:58



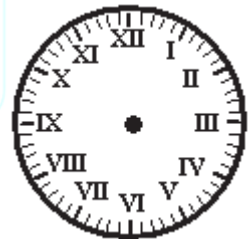
15) 12:39



16) 1:52



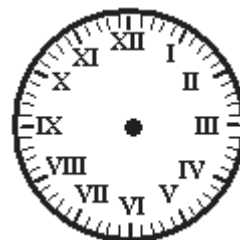
17) 12:38



18) 9:53



19) 5:41



20) 9:00