

# NUMBER LINES

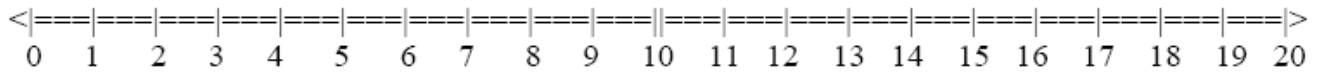


Name: \_\_\_\_\_ Date: \_\_\_/\_\_\_/\_\_\_ Score \_\_\_\_\_

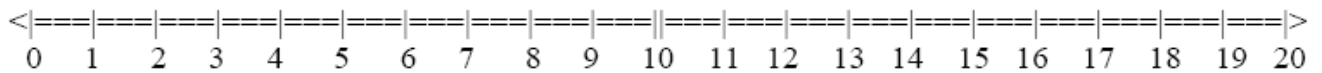
## WORKSHEET – 1

Use the number lines provided to help you solve each problem below, then mark your answer on the number line.

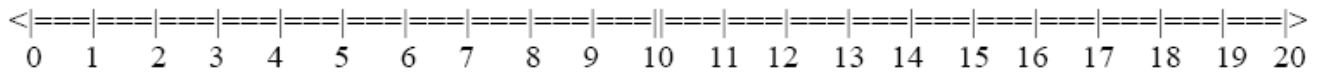
1.  $18 + 1$



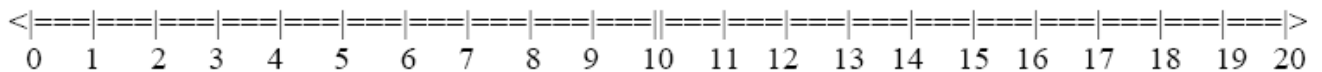
2.  $2 + 9$



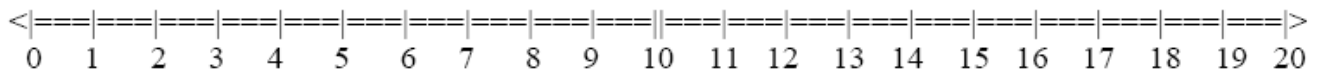
3.  $18 - 17$



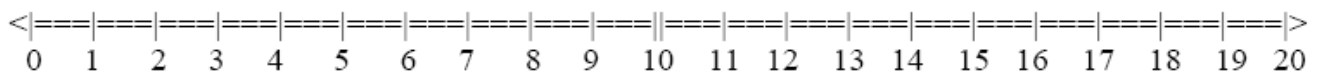
4.  $8 + 3$



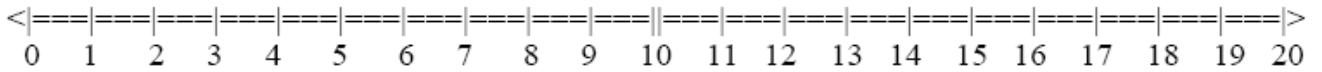
5.  $19 + 1$



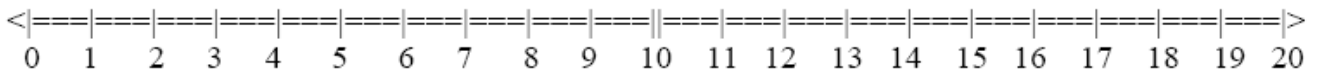
6.  $11 - 9$



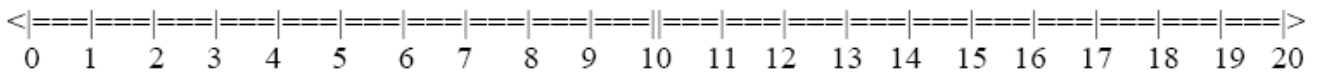
7.  $3 + 3$



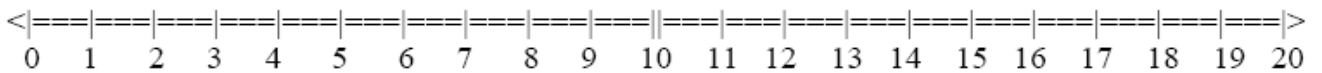
8.  $7 + 13$



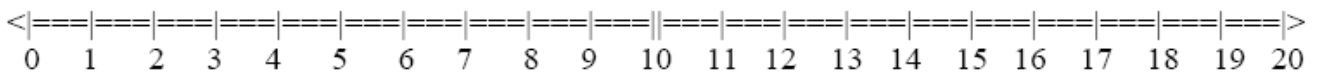
9.  $5 + 9$



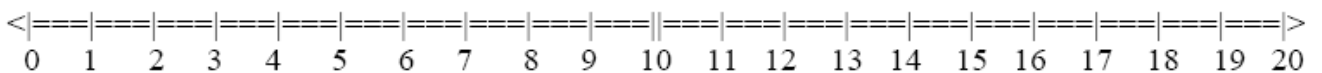
10.  $12 - 5$



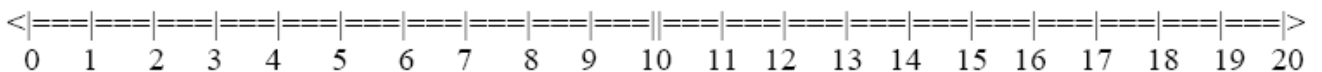
11.  $5 + 10$



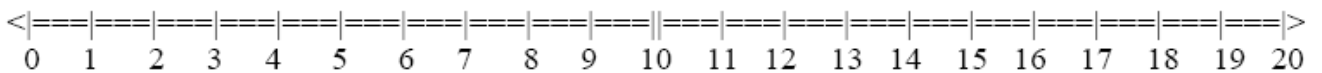
12.  $9 + 6$



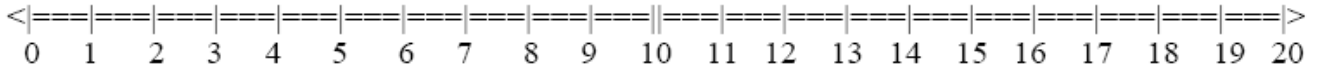
13.  $12 + 1$



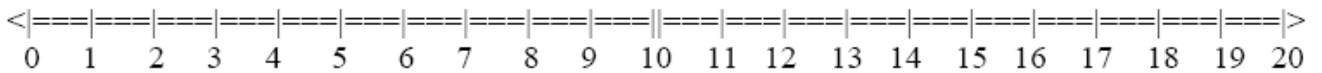
14.  $1 - 1$



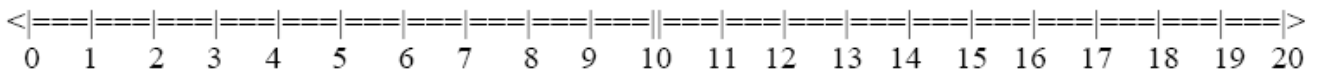
**15.**  $6 + 4$



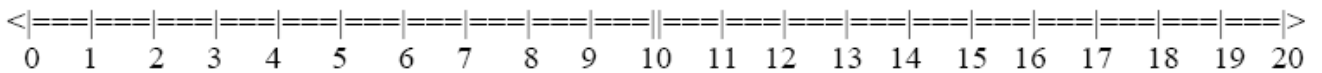
**16.**  $17 - 14$



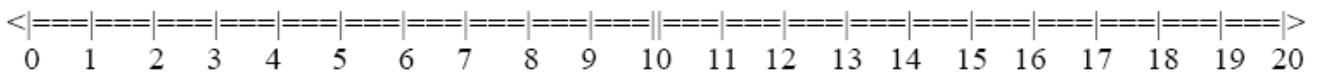
**17.**  $11 + 1$



**18.**  $18 - 7$



**19.**  $13 + 4$



**20.**  $3 - 1$

