

# NUMBER LINES

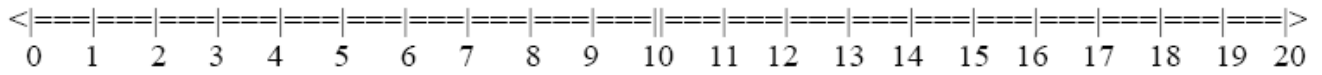


Name: \_\_\_\_\_ Date: \_\_\_/\_\_\_/\_\_\_ Score \_\_\_\_\_

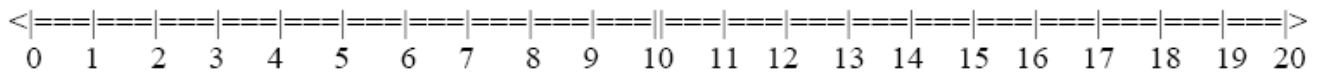
## WORKSHEET – 2

Use the number lines provided to help you solve each problem below, then mark your answer on the number line.

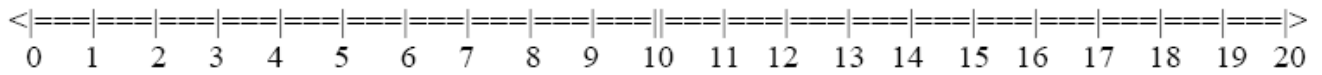
1.  $11 + 7$



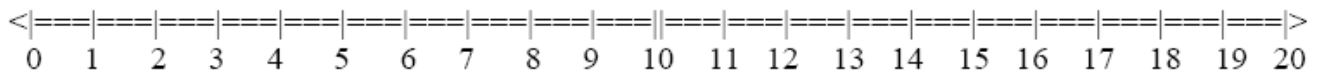
2.  $2 + 7$



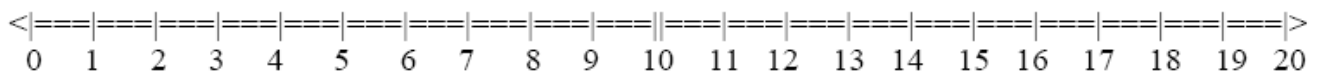
3.  $13 + 6$



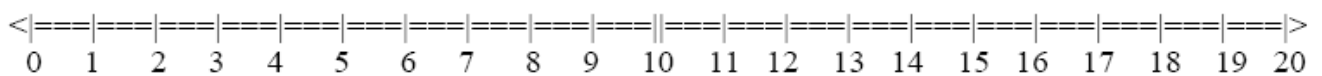
4.  $3 + 1$



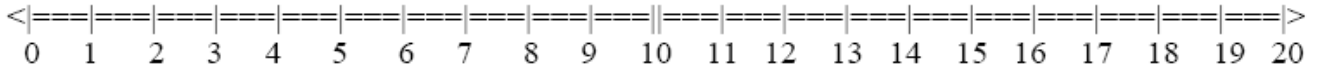
5.  $10 - 1$



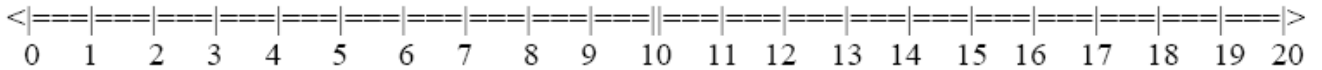
6.  $15 - 11$



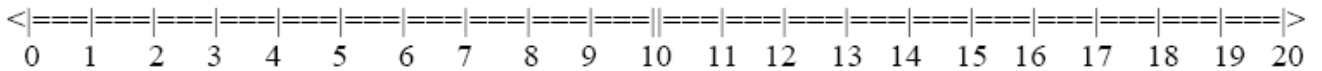
7.  $18 - 16$



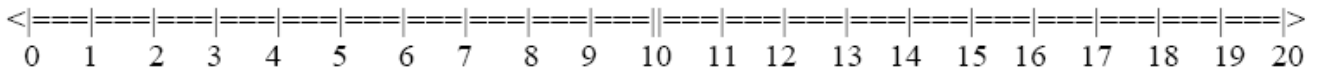
8.  $13 - 8$



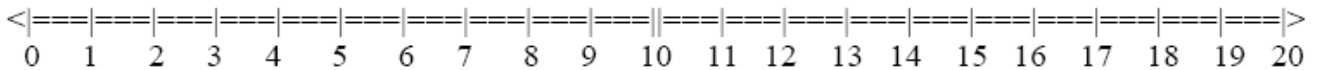
9.  $11 - 2$



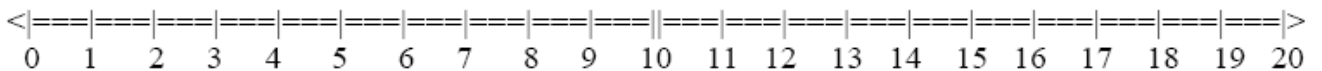
10.  $5 + 15$



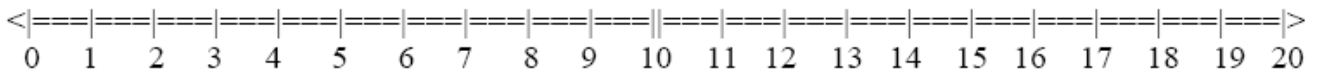
11.  $16 - 8$



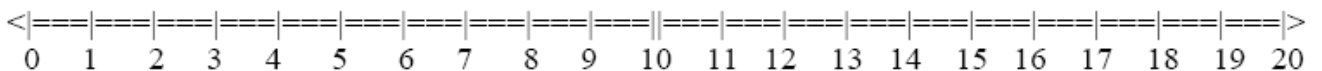
12.  $16 - 15$



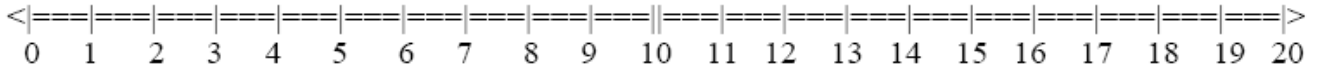
13.  $13 + 3$



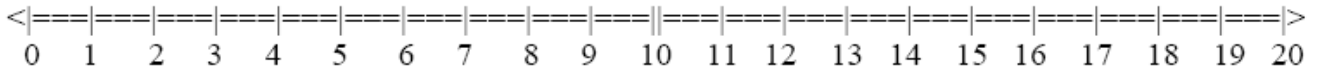
14.  $8 - 5$



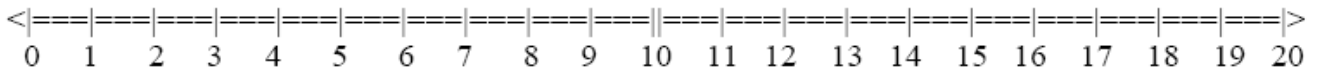
**15.**  $20 - 10$



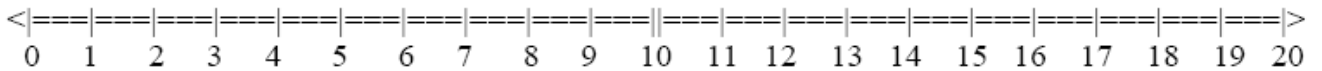
**16.**  $11 - 5$



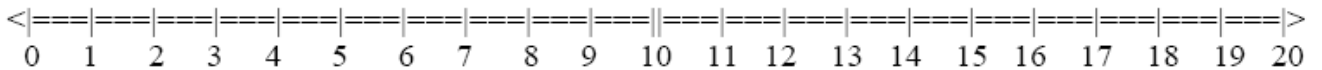
**17.**  $2 + 3$



**18.**  $9 + 4$



**19.**  $6 + 14$



**20.**  $9 + 8$

