

SKELETAL & NERVOUS SYSTEM

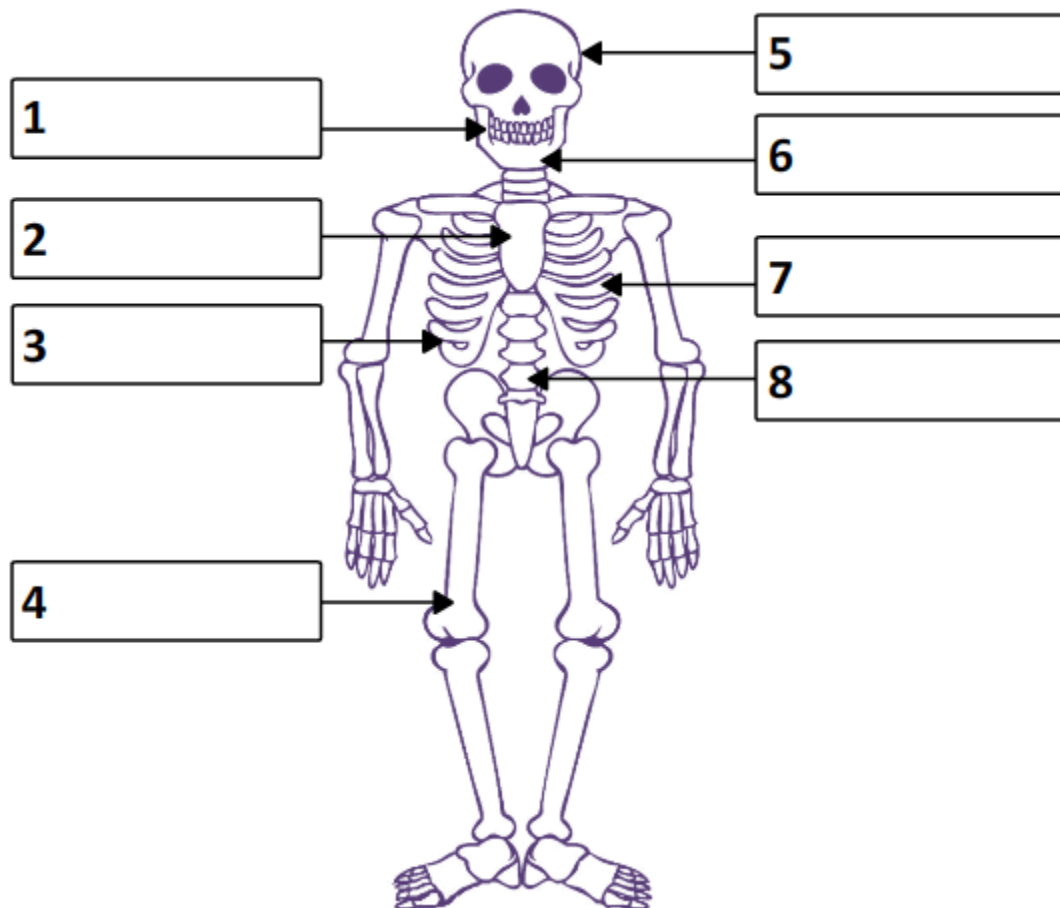


Name: _____ **Date:** ____/____/____ **Score** _____

WORKSHEET – 1

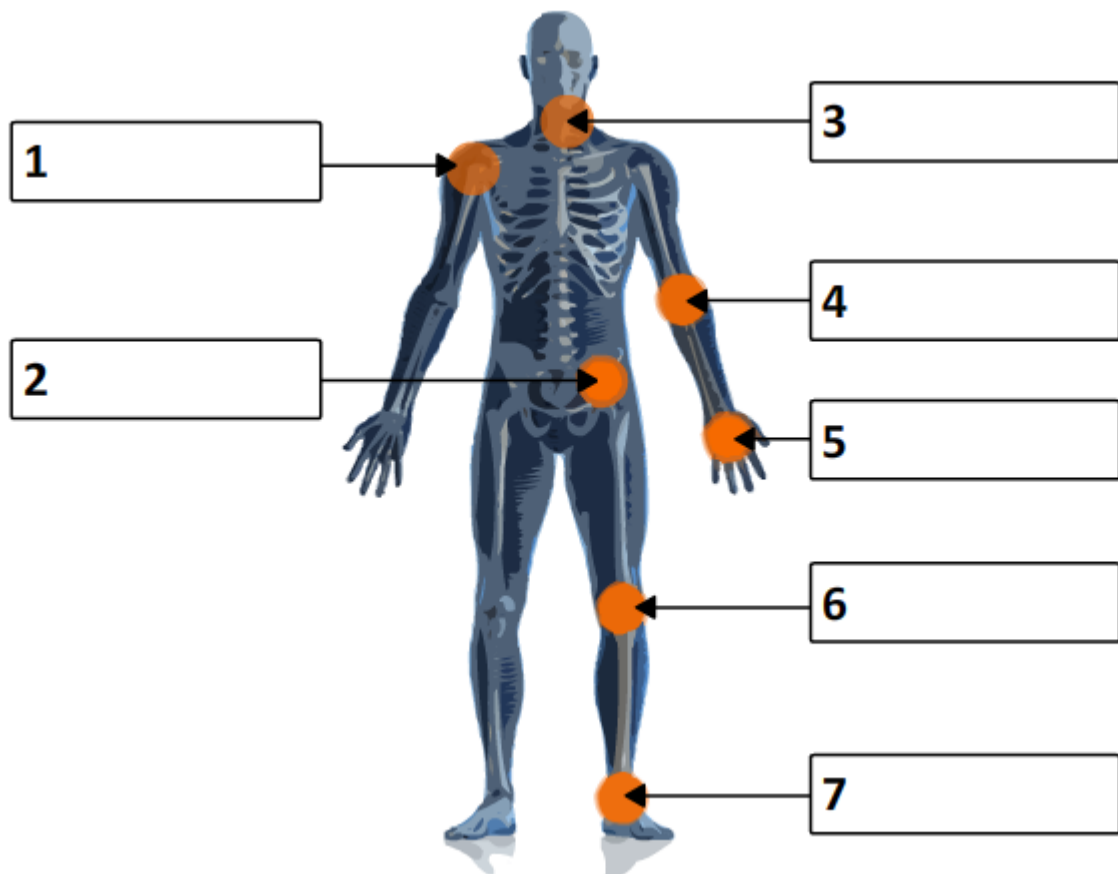
A. Identify the different parts of a skeletal system.

[Floating Ribs, Femur, Skull, Backbone, Upper Jaw, Sternum, Lower Jaw, Rib Cage]

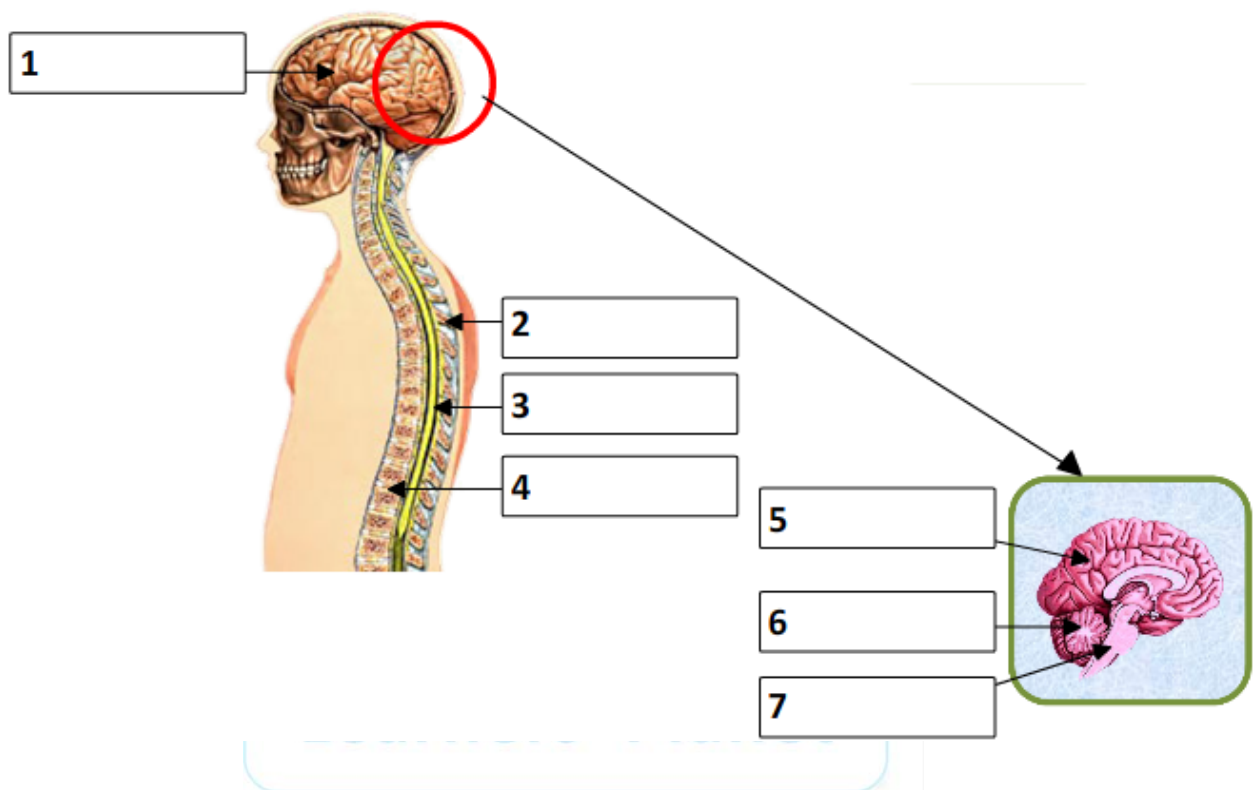


B. Identify the different types of joints present in the skeletal system.

[Hinge Joint-Hind Limb, Gliding Joint-Hind Limb, Pivot Joint, Hinge Joint-Forelimb, Gliding Joint-Forelimb, Ball and Socket Joint-Forelimb, Ball and Socket Joint-Hind Limb]



C. Identify the different parts of a nervous system.
[Backbone, Medulla, Brain, Spinal Cord, Cerebrum, Nerves, Cerebellum]



Answers:

- A.**
1. Upper Jaw
 2. Sternum
 3. Floating Ribs
 4. Femur
 5. Skull
 6. Lower Jaw
 7. Rib Cage
 8. Backbone
- B.**
1. Ball and Socket Joint-Forelimb
 2. Ball and Socket Joint-Hind Limb
 3. Pivot Joint
 4. Hinge Joint-Forelimb
 5. Gliding Joint-Forelimb
 6. Hinge Joint-Hind Limb
 7. Gliding Joint-Hind Limb
- C.**
1. Brain
 2. Nerves
 3. Spinal Cord
 4. Backbone
 5. Cerebrum
 6. Cerebellum
 7. Medulla