

SKELETAL & NERVOUS SYSTEM



Name: _____ Date: ___/___/___ Score _____

WORKSHEET – 2

Identify the correct option in the given picture.

1. Number of bones present in the skull of adult human being:



(a) 29

(b) 28

(c) 30

2. The only movable part of the skull:

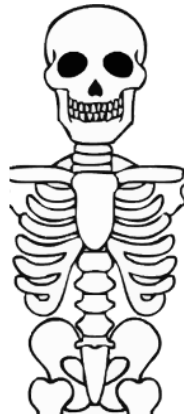


(a) Lower jaw

(b) Upper jaw

(c) Any of these

3. A long bone present at the centre of the chest:

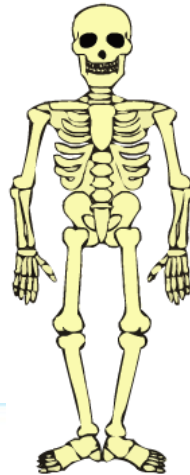


(a) Sternum

(b) Floating ribs

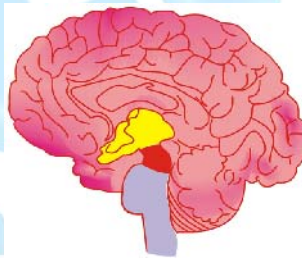
(c) Femur

4. The longest bone present in the body:



- (a) Sternum (b) Femur (c) Forelimbs

5. The brain stem is also known as:



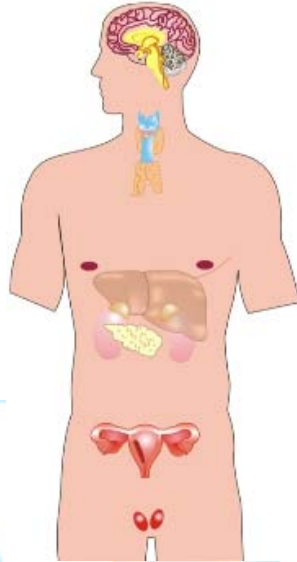
- (a) Cerebrum (b) Cerebellum (c) Medulla

6. Which of the following carries message to the brain?



- (a) Sensory nerves (b) Motor nerves (c) Both of these

7. The smallest bone present in our body is:

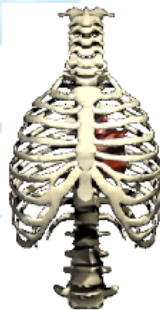


(a) Stirrup

(b) Scapula

(c) Sternum

8. Which of the following protects our heart?



(a) Sternum

(b) Skull

(c) Rib cage

Answers:

1. (b)
2. (a)
3. (a)
4. (b)
5. (c)
6. (a)
7. (a)
8. (b)

