

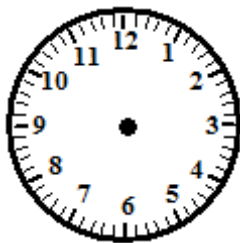
TELLING TIME



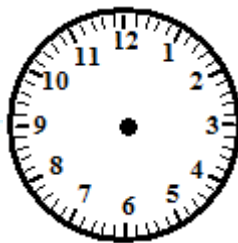
Name: _____ Date: ___/___/___ Score _____

WORKSHEET – 11

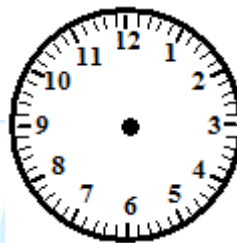
Draw the Hour and the Minute hand on each clock to match the time given.



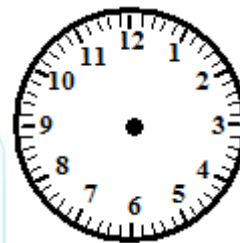
1. 4:30



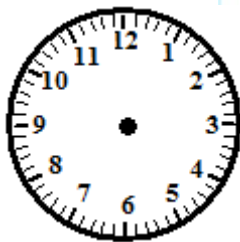
2. 10:30



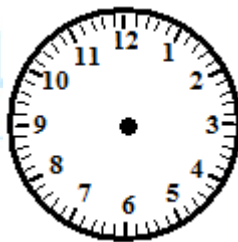
3. 5:30



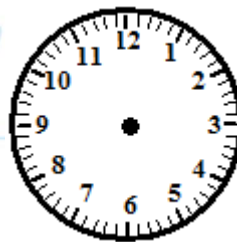
4. 12:00



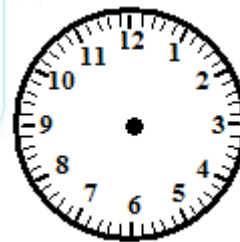
5. 7:00



6. 2:30



7. 10:00



8. 11:30