

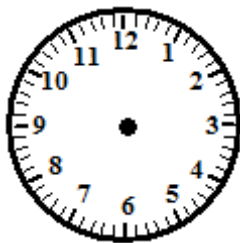
TELLING TIME



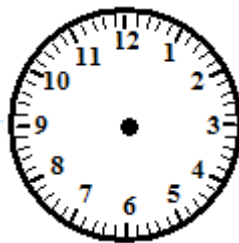
Name: _____ Date: ___/___/___ Score _____

WORKSHEET – 12

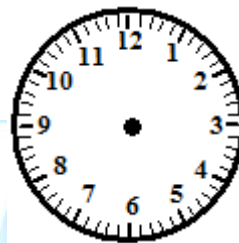
Draw the Hour and the Minute hand on each clock to match the time given.



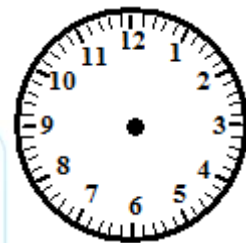
1. 12:00



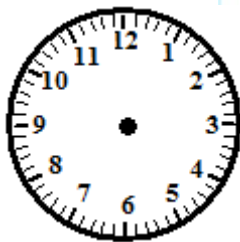
2. 6:30



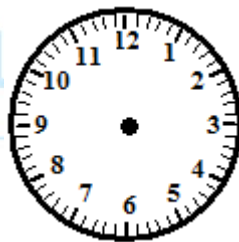
3. 6:00



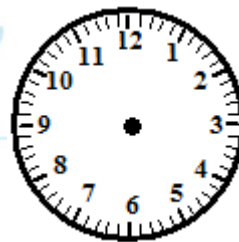
4. 7:30



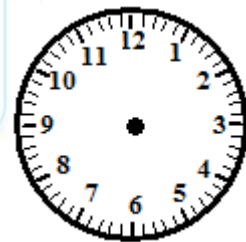
5. 8:00



6. 1:30



7. 5:30



8. 11:00