

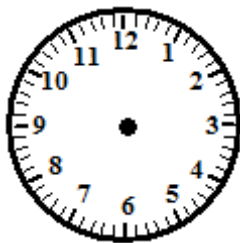
TELLING TIME



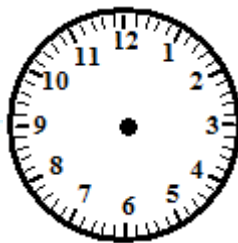
Name: _____ Date: ___/___/___ Score _____

WORKSHEET – 14

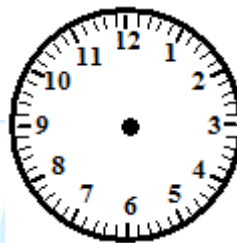
Draw the Hour and the Minute hand on each clock to match the time given.



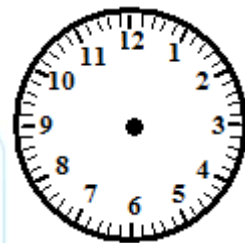
1. 11:05



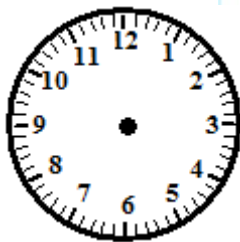
2. 9:50



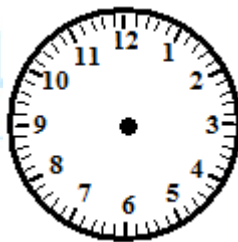
3. 12:20



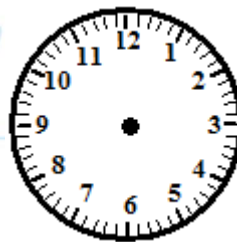
4. 7:15



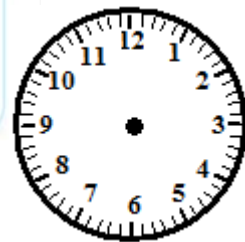
5. 4:05



6. 12:30



7. 3:50



8. 10:00