

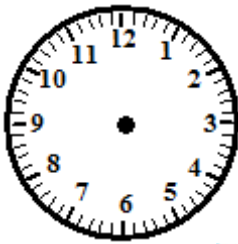
TELLING TIME



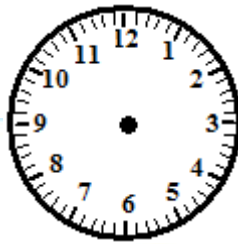
Name: _____ Date: ___/___/___ Score _____

WORKSHEET – 15

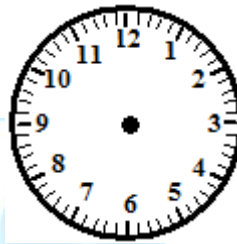
Draw the Hour and the Minute hand on each clock to match the time given.



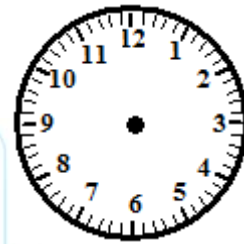
1. 8:55



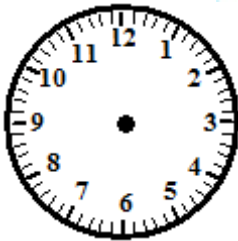
2. 3:40



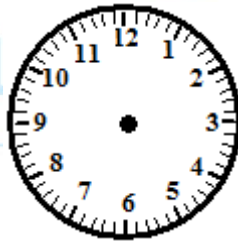
3. 12:25



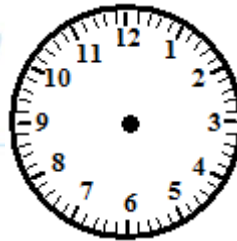
4. 3:50



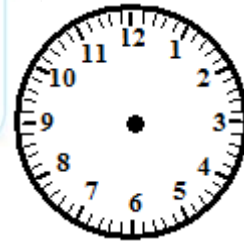
5. 1:50



6. 4:10



7. 4:40



8. 5:00