

TELLING TIME



Name: _____ Date: ____/____/____ Score _____

WORKSHEET-7

Directions: Read the time from each clock and write it in the blank below.



1) _____



2) _____



3) _____



4) _____



5) _____



6) _____



7) _____



8) _____



9) _____



10) _____



11) _____



12) _____



13) _____



14) _____



15) _____



16) _____



17) _____



18) _____



19) _____



20) _____

TELLING TIME



Name: _____ Date: ____/____/____ Score _____

WORKSHEET-8

Directions: Read the time from each clock and write it in the blank below.



1) _____



2) _____



3) _____



4) _____



5) _____



6) _____



7) _____



8) _____



9) _____



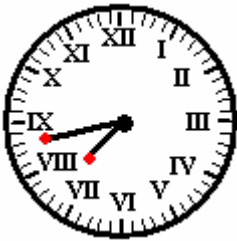
10) _____



11) _____



12) _____



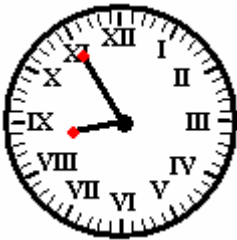
13) _____



14) _____



15) _____



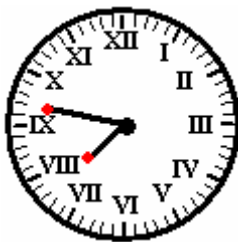
16) _____



17) _____



18) _____



19) _____



20) _____

Answer Key Worksheet-7

- (1) 10:27
- (2) 5:46
- (3) 4:26
- (4) 9:25
- (5) 9:37
- (6) 6:29
- (7) 1:24
- (8) 6:59
- (9) 9:19
- (10) 10:18
- (11) 4:15
- (12) 5:04
- (13) 1:29
- (14) 10:02
- (15) 9:43
- (16) 11:14
- (17) 12:33
- (18) 5:19
- (19) 5:43
- (20) 1:44

Answer Key Worksheet-8

- (1) 7:05
- (2) 3:06
- (3) 10:00
- (4) 1:09
- (5) 8:54
- (6) 5:28
- (7) 2:50
- (8) 12:15
- (9) 10:06
- (10) 8:38
- (11) 7:20
- (12) 9:49
- (13) 7:43
- (14) 12:30
- (15) 3:17
- (16) 8:55
- (17) 7:25
- (18) 4:17
- (19) 7:47
- (20) 1:26