

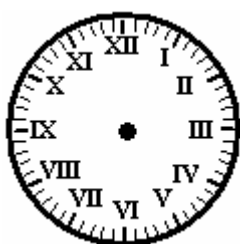
TELLING TIME



Name: _____ Date: ____/____/____ Score _____

WORKSHEET-17

Directions: Draw the Hour and the Minute hand on each clock to match the time given.



1) 10:00



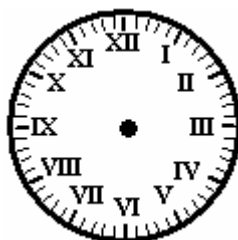
2) 3:11



3) 1:21



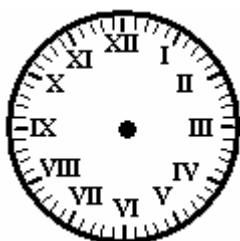
4) 6:07



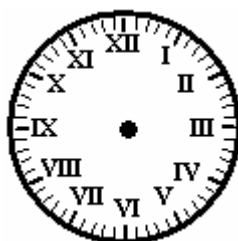
5) 5:39



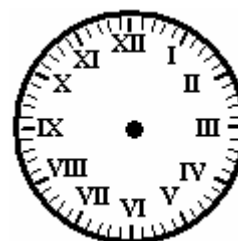
6) 1:09




7) 2:25




8) 11:18



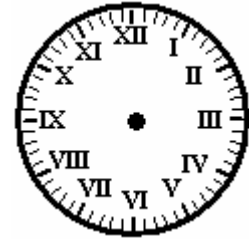
9) 2:56




10) 10:07



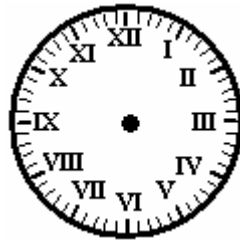
11) 1:59



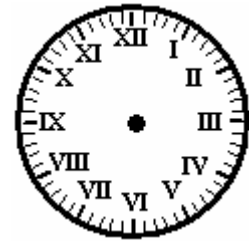
12) 1:57



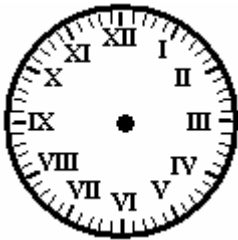
13) 5:17



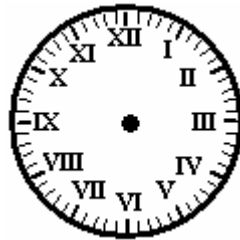
14) 8:59



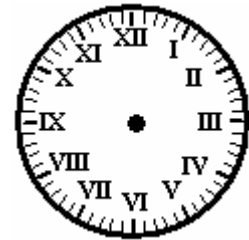
15) 11:38



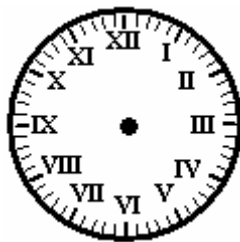
16) 3:43



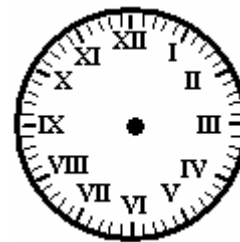
17) 10:09



18) 5:57



19) 12:42



20) 8:53

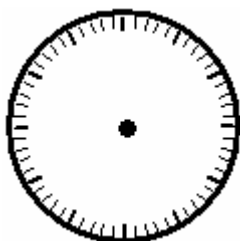
TELLING TIME




Name: _____ Date: ____/____/____ Score _____

WORKSHEET-18

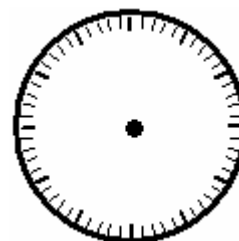
Directions: Draw the Hour and the Minute hand on each clock to match the time given.



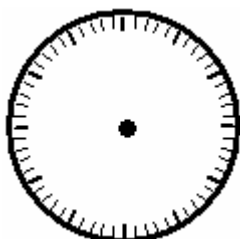
1) 6:00



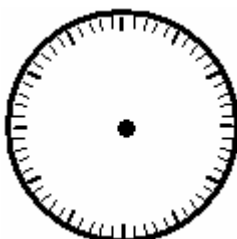
2) 2:47



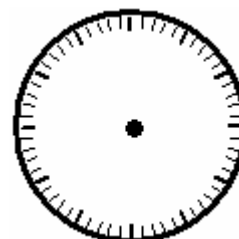
3) 1:38



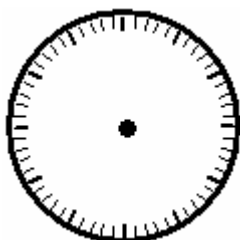
4) 9:31



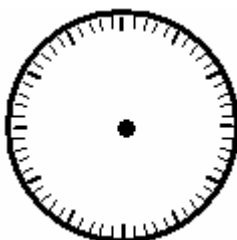
5) 11:37



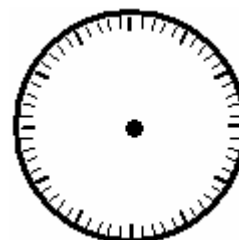
6) 11:45




7) 1:42



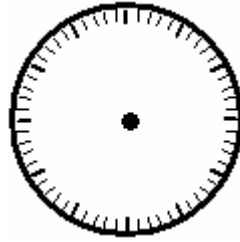
8) 2:41



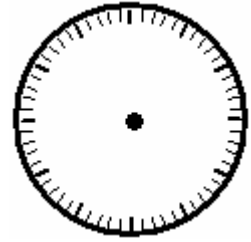
9) 4:29




10) 8:43



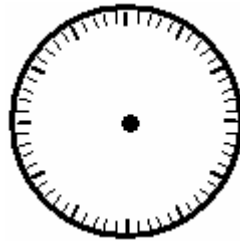
11) 2:46



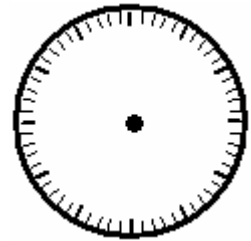
12) 6:51




13) 1:45



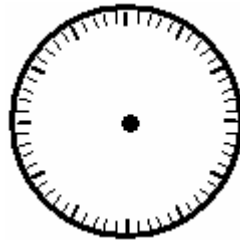
14) 5:41



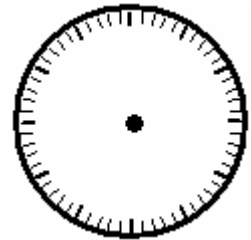
15) 3:50



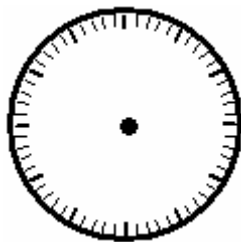
16) 8:37



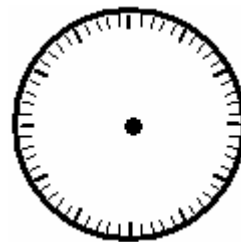
17) 6:37



18) 2:39



19) 1:30



20) 12:47