

TYPES OF ANGLES

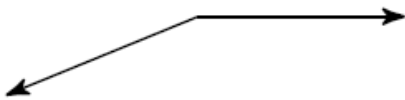


Name: _____ Date: ___/___/___ Score _____

WORKSHEET-1

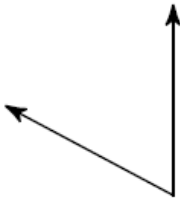
Classify each angle as acute, obtuse, right, or straight.

1.



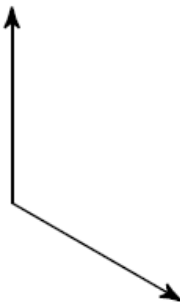
- A. obtuse B. right C. acute D. straight

2.



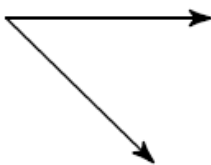
- A. obtuse B. straight C. right D. acute

3.

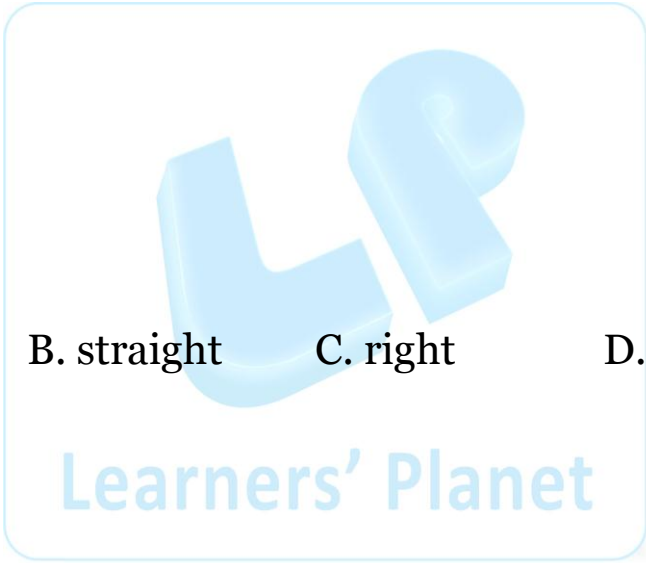


- A. straight B. acute C. right D. obtuse

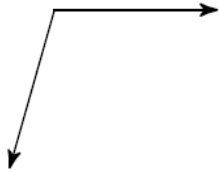
4.



- A. acute B. straight C. right D. obtuse



5.




- A. obtuse B. right C. acute D. straight

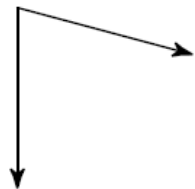
6.



- A. obtuse B. right C. acute D. straight

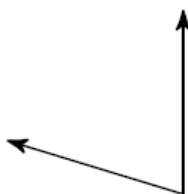


7.



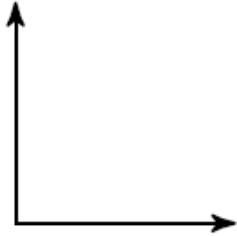
- A. straight B. obtuse C. acute D. right

8.



- A. obtuse B. right C. straight D. acute

9.



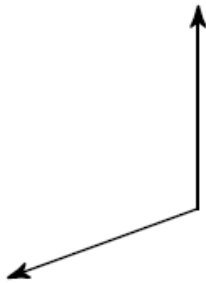
A. straight

B. acute

C. right

D. obtuse

10.

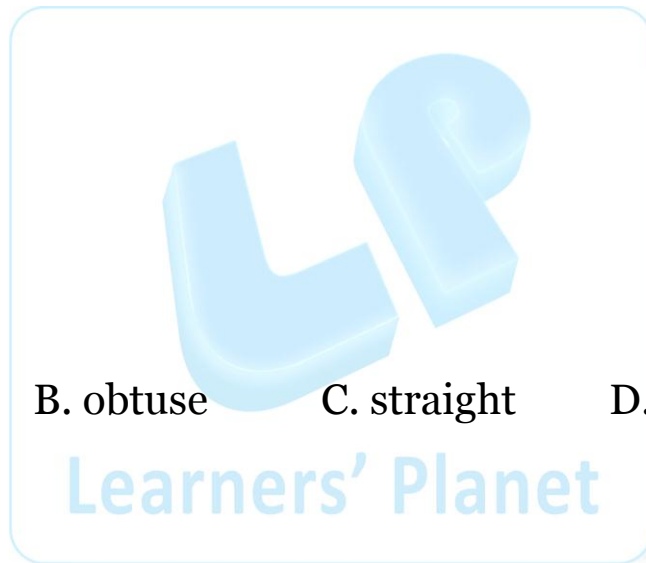


A. right

B. obtuse

C. straight

D. acute



Learners' Planet

Answer key Worksheet-1

1. A
2. D
3. D
4. A
5. A
6. A
7. C
8. D
9. C
10. B

